
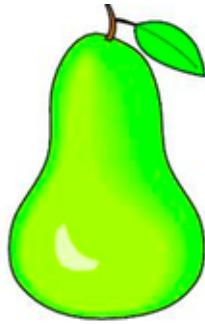



## Problem of the Week #6

### Fruit Stand



At the fruit stand,  
an apple and a pear cost 25 cents,  
a pear and a banana cost 19 cents, and  
an apple and a banana cost 16 cents.

Alex uses **two** of their coins to buy an apple.  
In total, Alex buys one apple, one pear, and one banana.

What coins does Alex use to buy the three fruits?

**Show your thinking using pictures, numbers or symbols.**

Name: \_\_\_\_\_ Class: \_\_\_\_\_

First and last name, please

**Due: 12/8/22 (Thursday)**